

Unit 2, Station 3, Round 1, Task 3




Fraction, Decimal

Name: **Answer Key**

Determine the value written as a fraction , decimal


Ans

Ex)



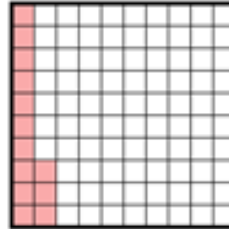
Fraction $\frac{62}{100}$
Decimal 0.62

1)




Fraction $\frac{7}{10}$
Decimal 0.7

2)



Fraction $\frac{13}{100}$
Decimal 0.13

3)



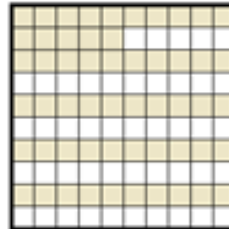
Fraction $\frac{6}{100}$
Decimal 0.06

4)




Fraction $\frac{8}{10}$
Decimal 0.8

5)




Fraction $\frac{55}{100}$
Decimal 0.55

6)




Fraction $\frac{53}{100}$
Decimal 0.53

7)



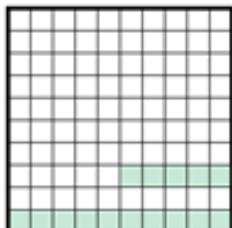
Fraction $\frac{74}{100}$
Decimal 0.74

8)




Fraction $\frac{5}{10}$
Decimal 0.5

9)




Fraction $\frac{15}{100}$
Decimal 0.15

10)



Fraction $\frac{3}{10}$
Decimal 0.3

11)



Fraction $\frac{9}{10}$
Decimal 0.9